

## SSC MTS 2017 RE-EXAM PAPER : Held on 21- SEPTEMBER-2017 Shift-1

### ::General Intelligence & Reasoning::

---

QID : 1 -

In the following question, select the number which can be placed at the sign of question mark (?) from the given alternatives.

निम्नलिखित प्रश्न में दिए गए विकल्पों में से प्रश्न चिह्न (?) के स्थान पर आने वाली संख्या को चुनिए।

3	4	4	?
5	2	6	60
8	1	5	40

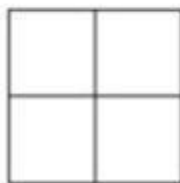
- 1) 42
- 2) 48
- 3) 44
- 4) 168

**Correct Answer: 48**

QID : 2 -

How many squares are there in the given figure?

दी गई आकृति में कितने वर्ग हैं?



- 1) 4
- 2) 5
- 3) 8
- 4) 9

**Correct Answer: 5**

**QID : 3 -**

A word is represented by only one set of numbers as given in any one of the alternatives. The sets of numbers given in the alternatives are represented by two classes of alphabets as shown in the given two matrices. The columns and rows of **Matrix-I** are numbered from 0 to 4 and that of **Matrix-II** are numbered from 5 to 9. A letter from these matrices can be represented first by its row and next by its column, for example, 'C' can be represented by 11, 67, etc., and 'E' can be represented by 22, 58, etc. Similarly, you have to identify the set for the word "FOLK".

एक शब्द केवल एक संख्या-समूह द्वारा दर्शाया गया है, जैसा कि विकल्पों में से किसी एक में दिया गया है। विकल्पों में दिए गए संख्या-समूह अक्षरों के दो वर्गों द्वारा दर्शाए गए हैं, जैसा कि दिए गए दो आव्यूहों में है। आव्यूह-I के स्तम्भ और पंक्ति की संख्या 0 से 4 है और आव्यूह-II की 5 से 9। इन आव्यूहों से एक अक्षर को पहले उसकी पंक्ति और बाद में स्तम्भ संख्या द्वारा दर्शाया जा सकता है। उदाहरण के लिए 'C' को 11, 67, आदि द्वारा दर्शाया जा सकता है तथा 'E' को 22, 58, आदि द्वारा दर्शाया जा सकता है। इसी तरह से आपको प्रश्न में दिए शब्द "FOLK" के लिए समूह को पहचानना है।

		Matrix-I				
		आव्यूह-I				
		0	1	2	3	4
0	A	K	S	Y	D	
1	F	C	M	U	B	
2	N	H	E	O	W	
3	T	P	J	G	Q	
4	X	V	R	L	I	

		Matrix-II				
		आव्यूह-II				
		5	6	7	8	9
5	B	L	V	E	O	
6	J	T	C	M	W	
7	H	R	A	K	U	
8	F	P	Z	I	S	
9	D	N	X	G	Q	

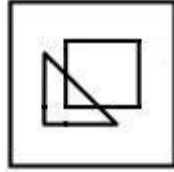
- 1) 10, 59, 56, 01
- 2) 85, 59, 43, 79
- 3) 10, 23, 43, 79
- 4) 85, 24, 43, 78

**Correct Answer: 10, 59, 56, 01**

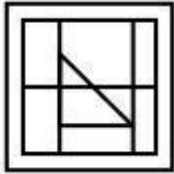
**QID : 4 -**

From the given answer figures, select the one in which the question figure is hidden/embedded.

दी गई उत्तर आकृतियों में से उस उत्तर आकृति को चुनिए जिस में प्रश्न आकृति निहित है।



1)



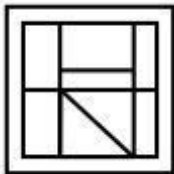
2)



3)



4)

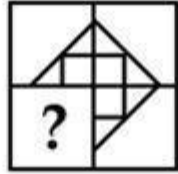


**Correct Answer: 3**

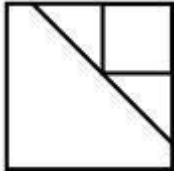
QID : 5 -

Which answer figure will complete the pattern in the question figure?

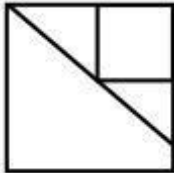
कौन सी उत्तर आकृति प्रश्न आकृति के प्रतिरूप को पूरा करेगी?



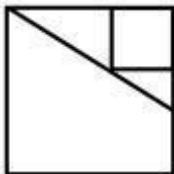
1)



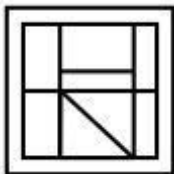
2)



3)



4)

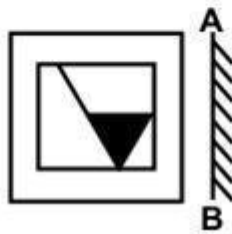


**Correct Answer: 2**


QID : 6 -

If a mirror is placed on the line AB, then which of the answer figures is the right image of the given figure?


यदि एक दर्पण को AB रेखा पर रखा जाए, तो दी गई उत्तर आकृतियों में से कौन सी आकृति प्रश्न आकृति की सही प्रतिबिम्ब होगी?



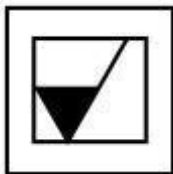
1)



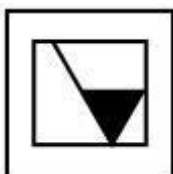
2)



3)



4)

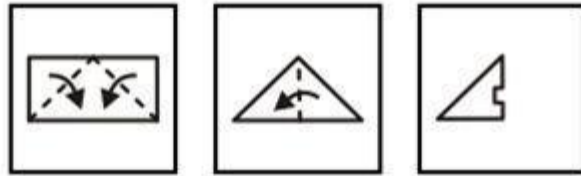


**Correct Answer: 3**

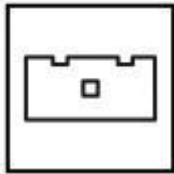
QID : 7 -

A piece of paper is folded and punched as shown below in the question figures. From the given answer figures, indicate how it will appear when opened?

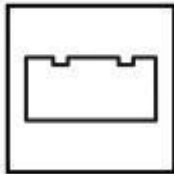
नीचे के प्रश्न आकृतियों में दिखाए अनुसार कागज को मोड़कर छेदने तथा खोलने के बाद वह किस उत्तर आकृति जैसा दिखाई देगा?



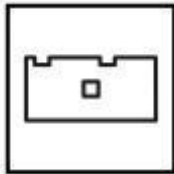
1)



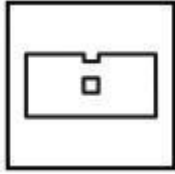
2)



3)



4)



**Correct Answer: 1**

**QID : 8 -** If 'c' means '÷', 'd' means '+', 'e' means '-' and 'f' means 'x', then

**24 c 3 f 4 d 6 = ?**

- 1) 32
- 2) 30
- 3) 38
- 4) 28

**Correct Answer: 38**

**QID : 9 -** If  $9 \% 6 \% 5 \% 1 = 5619$  and  $3 \% 4 \% 1 \% 6 = 1463$ , then  $1 \% 2 \% 5 \% 7 = ?$

- 1) 1725
- 2) 5271
- 3) 2571
- 4) 7125

**Correct Answer: 5271**

**QID : 10 -** Arrange the given words in the sequence in which they occur in the dictionary.

- 1. Boiled
- 2. Brinjal
- 3. Boring
- 4. Banged
- 5. Brown

- 1) 43152
- 2) 41325
- 3) 43125
- 4) 41352

**Correct Answer: 41325**

**QID : 11 -** In the following question,select the missing number from the given alternatives.

**68, 65, 60, 53, 44, ?**

- 1) 31
- 2) 37

3) 35

4) 33

**Correct Answer: 33**

**QID : 12 - A series is given with one term missing. Select the correct alternative from the given ones that will complete the series.**

**A, Z, C, X, E, V, G, T, ?, ?**

1) JS

2) KS

3) IR

4) KR

**Correct Answer: IR**

**QID : 13 - In the following question, select the odd word pair from the given alternatives.**

1) Up : Down

2) Day : Night

3) Happy : Smile

4) Open : Close

**Correct Answer: Happy : Smile**

**QID : 14 - In the following question, select the odd number pair from the given alternatives.**

1) 3 : 9

2) 5 : 25

3) 6 : 36

4) 8 : 63

**Correct Answer: 8 : 63**

**QID : 15 - In the following question, select the odd letters from the given alternatives.**

1) OU

2) AI

3) EI

4) IO


**Correct Answer: AI**

**QID : 16 - Identify the diagram that best represents the relationship among the given classes.**

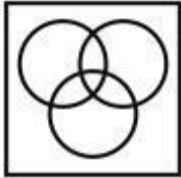
**Cap, Pencil, Apple**



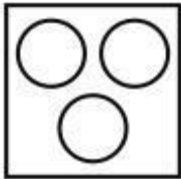
1)



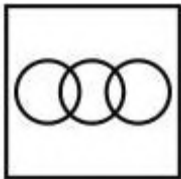
2)



3)



4)



**Correct Answer: 3**

**QID : 17 - In the following question, select the related word from the given alternatives.**

**Writer : Pen :: Plumber : ?**

- 1) Screwdriver
- 2) Wrench
- 3) Saw
- 4) None of these

**Correct Answer: Wrench**

**QID : 18 - In the following question, select the related number from the given alternatives.**

**14 : 35 :: 18 : ?**

- 1) 55
- 2) 40

3) 45

4) 50

**Correct Answer: 45**

**QID : 19 - In the following question, select the related letters from the given alternatives.**

**XJ : AM :: IS : ?**

1) LU

2) LV

3) KU

4) KV

**Correct Answer: LV**

**QID : 20 - In the following question, select the word which cannot be formed using the letters of the given word.**

**CORPORATION**

1) PORT

2) CRAIN

3) TRAIN

4) SPORT

**Correct Answer: SPORT**

**QID : 21 - S walks 8 km towards east. He turns right and walks 6 km. He turns right and walks 8 km. How far (in km) is he from his starting point?**

1) 14

2) 10

3) 8

4) 6

**Correct Answer: 6**

**QID : 22 - L is 3 years older to M. M is 6 years younger to N. N is 4 years older to O. O is 7 years younger to P. Who is the youngest?**

1) O

2) N

3) M

4) L

**Correct Answer: M**

**QID : 23 - In the following question below are given some statements followed by some conclusions. Taking the given statements to be true even if they seem to be at**

variance from commonly known facts, read all the conclusions and then decide which of the given conclusion logically follows the given statements.

**Statements:**

- I. All cups are chairs.
- II. All chairs are tables.

**Conclusions:**

- I. Some tables are cups.
  - II. Some chairs are tables.
- 1) Only conclusion (I) follows.
  - 2) Only conclusion (II) follows.
  - 3) Both conclusion follow.
  - 4) Neither conclusion (I) nor conclusion (II) follows.

**Correct Answer: Both conclusion follow.**

**QID : 24 - In a certain code language, "MOVIE" is written as "LPUJD". How is "CINEMA" written in that code language?**

- 1) BJMFLB
- 2) BJMFLZ
- 3) BJNFLZ
- 4) BJMDLB

**Correct Answer: BJMFLB**

**QID : 25 - In a certain code language, "SOME" is written as "10645" and "BOYS" is written as "26710". How is "RUNS" written in that code language?**

- 1) 93510
- 2) 93501
- 3) 93511
- 4) 92510

**Correct Answer: 93510**

## SSC MTS 2017 RE-EXAM PAPER : Held on 21- SEPTEMBER-2017 Shift-1

### ::Numerical Aptitude::

---

**QID : 26 - What is the value of  $11 + 12 + 13 + \dots + 35$ ?**

- 1) 575
- 2) 630
- 3) 585
- 4) 595

**Correct Answer: 575**

**QID : 27 - What is the value of  $38 \div 19 \times 3 + 5$ ?**

- 1) 11
- 2) 10
- 3) 13
- 4) 17

**Correct Answer: 11**

**QID : 28 - What is the Highest Common Factor of  $\frac{3}{4}$  and  $\frac{12}{13}$ ?**

- 1) 42795
- 2) 19054
- 3) 42887
- 4) 41426

**Correct Answer: 19054**

**QID : 29 - If  $347P$  is divisible by 9, then what is the value of  $P$ ?**

- 1) 2
- 2) 3
- 3) 4
- 4) 7

**Correct Answer: 4**

**QID : 30 - What is the value of  $(37 + 23)^2 - (37 - 23)^2$ ?**

- 1) 1908
- 2) 1602
- 3) 1702
- 4) 3404

**Correct Answer: 3404**

**QID : 31 - Which fraction among  $\frac{3}{11}$ ,  $\frac{4}{7}$  and  $\frac{5}{8}$  is the smallest?**

- 1)  $\frac{3}{11}$
- 2)  $\frac{4}{7}$
- 3)  $\frac{5}{8}$
- 4) All are equal

**Correct Answer:  $\frac{3}{11}$**

**QID : 32 - Three taps A, B and C can fill a tank in 27, 36 and 54 minutes respectively. If all the three taps are opened, then how much time (in minutes) it will take to completely fill the tank?**

- 1) 16
- 2) 12
- 3) 10
- 4) 15

**Correct Answer: 12**

**QID : 33 - Two pipes X and Y can fill a cistern in 6 hours and 10 hours respectively. Pipe Z can empty the tank in 4 hours. If all the three pipes are open then in how many hours the cistern will be full?**

- 1) 30
- 2) 45
- 3) 50
- 4) 60

**Correct Answer: 60**

**QID : 34 - The side of an equilateral triangle is equal to the diagonal of the square. If the side of the square is 10 cm, then what is the area of the equilateral triangle?**

- 1)  $50\sqrt{2}$
- 2)  $50\sqrt{3}$
- 3)  $100\sqrt{2}$
- 4)  $100\sqrt{3}$

**Correct Answer:  $50\sqrt{3}$**

**QID : 35 - Marked price of an article is Rs 7600 and its selling price is Rs 5472. What is discount percentage?**

- 1) 34
- 2) 28
- 3) 31
- 4) 30

**Correct Answer: 28**

**QID : 36 - Selling price of an article is Rs 4290. If 34% discount is given, then what is the marked price (in Rs)?**

- 1) 6800
- 2) 7200
- 3) 6300
- 4) 6500

**Correct Answer: 6500**

**QID : 37 - Total runs scored by three batsmen x, y and z are 1584. Ratio of runs scored by x and y is 4 : 3 and y and z is 5 : 3. How many runs are scored by x?**

- 1) 742
- 2) 614
- 3) 516
- 4) 720

**Correct Answer: 720**

**QID : 38 - Monthly income of Rajesh and Mahesh is in ratio of 9 : 13 respectively. The difference in their income is Rs 20000. What will be the monthly income of Mahesh?**

- 1) 45000
- 2) 65000
- 3) 78000
- 4) 54000

**Correct Answer: 65000**

**QID : 39 - Average weight of a group of 9 students is 43 kg. When a new student joins the group, the average weight of the group becomes 45 kg. What is the weight (in kg) of the new student?**

- 1) 65
- 2) 59
- 3) 63
- 4) 61

**Correct Answer: 63**

**QID : 40 - If  $0.8 \times \text{cost price} = 0.6 \times \text{selling price}$ , then what is the profit percentage?**

- 1) 33.33
- 2) 25
- 3) 20
- 4) 10

**Correct Answer: 33.33**

**QID : 41 - A dealer claims to sell his goods at cost price but uses a weight of 80 gm for 100 gm. What is the profit percentage for the dealer?**

- 1) 12.5
- 2) 10
- 3) 20
- 4) 25

**Correct Answer: 25**

**QID : 42 - If the price of sugar is increased by 10%, then by how much percent consumption should be reduced so that the expenditure remains the same?**

- 1) 9.09
- 2) 10
- 3) 12.5
- 4) 20

**Correct Answer: 9.09**

**QID : 43 - If the radius of a circle is decreased by 30%, then what is the decrease in the area of the circle?**

- 1) 51
- 2) 60
- 3) 69
- 4) 30

**Correct Answer: 51**

**QID : 44 - Kamal covers  $\frac{4}{5}$  of the total distance by train and the remaining 15 km by bus. What is his total journey (in km)?**

- 1) 50
- 2) 75
- 3) 85
- 4) 35

**Correct Answer: 75**

**QID : 45 - A man can row 12 km/hr in still water. If the speed of the current is 3 km/hr, he takes 4 hours more in upstream than in the downstream. What is the distance (in km)?**

- 1) 30
- 2) 45
- 3) 60
- 4) 90

**Correct Answer: 90**

**QID : 46 - A sum amounts to Rs 1210 in 2 years when invested at compound interest.**

**If principal is Rs 1000, then what is the rate of interest (in %)?**

- 1) 10
- 2) 20
- 3) 15
- 4) 12

**Correct Answer: 10**

**QID : 47 -**

The table given below shows cost of journey (in Rs) from Delhi to 4 different towns on 4 different trains.

नीचे दी गई तालिका में 4 विभिन्न रेलगाड़ियों पर दिल्ली से 4 भिन्न शहरों की यात्रा के व्यय (रु में) को दर्शाया गया है।

Towns शहर	Train 1 रेलगाड़ी 1	Train 2 रेलगाड़ी 2	Train 3 रेलगाड़ी 3	Train 4 रेलगाड़ी 4
A	4300	3100	4000	6000
B	4500	3300	3900	6300
C	4800	2600	4200	5600
D	4700	3200	3600	5700

**What is average cost (in Rs) of journey to Town A?**

- 1) 4400
- 2) 4350
- 3) 4150
- 4) 4200

**Correct Answer: 4350**

**QID : 48 -**



The table given below shows cost of journey (in Rs) from Delhi to 4 different towns on 4 different trains.

नीचे दी गई तालिका में 4 विभिन्न रेलगाड़ियों पर दिल्ली से 4 भिन्न शहरों की यात्रा के व्यय (रु में) को दर्शाया गया है।

Towns शहर	Train 1 रेलगाड़ी 1	Train 2 रेलगाड़ी 2	Train 3 रेलगाड़ी 3	Train 4 रेलगाड़ी 4
A	4300	3100	4000	6000
B	4500	3300	3900	6300
C	4800	2600	4200	5600
D	4700	3200	3600	5700

Which of the following has the least cost?

- 1) Train 2 to A
- 2) Train 1 to A
- 3) Train 2 to C
- 4) Train 1 to B

**Correct Answer: Train 2 to C**

QID : 49 -

The table given below shows cost of journey (in Rs) from Delhi to 4 different towns on 4 different trains.

नीचे दी गई तालिका में 4 विभिन्न रेलगाड़ियों पर दिल्ली से 4 भिन्न शहरों की यात्रा के व्यय (रु में) को दर्शाया गया है।

Towns शहर	Train 1 रेलगाड़ी 1	Train 2 रेलगाड़ी 2	Train 3 रेलगाड़ी 3	Train 4 रेलगाड़ी 4
A	4300	3100	4000	6000
B	4500	3300	3900	6300
C	4800	2600	4200	5600
D	4700	3200	3600	5700

What is total least cost (in Rs) of Journey from Delhi to town A and Delhi to town D?

- 1) 6300
- 2) 5700
- 3) 6400
- 4) 6600

**Correct Answer: 6300**

QID : 50 -

The table given below shows cost of journey (in Rs) from Delhi to 4 different towns on 4 different trains.

नीचे दी गई तालिका में 4 विभिन्न रेलगाड़ियों पर दिल्ली से 4 भिन्न शहरों की यात्रा के व्यय (रु में) को दर्शाया गया है।

Towns शहर	Train 1 रेलगाड़ी 1	Train 2 रेलगाड़ी 2	Train 3 रेलगाड़ी 3	Train 4 रेलगाड़ी 4
A	4300	3100	4000	6000
B	4500	3300	3900	6300
C	4800	2600	4200	5600
D	4700	3200	3600	5700

What will be the maximum cost (in Rs) of travelling from Delhi to the four towns?

- 1) 23600
- 2) 22700
- 3) 24500
- 4) 21900

**Correct Answer: 23600**

## SSC MTS 2017 RE-EXAM PAPER : Held on 21- SEPTEMBER-2017 Shift-1

### ::General English::

---

**QID : 51 - In the following question, some part of the sentence may have errors. Find out which part of the sentence has an error and select the appropriate option. If a sentence is free from error, select 'No Error'.**

**Scientists see the evidence (1)/ of early life in (2)/ ancient rocks. (3)/ No Error (4)**

- 1) 1
- 2) 2
- 3) 3
- 4) 4

**Correct Answer: 4**

**QID : 52 - In the following question, some part of the sentence may have errors. Find out which part of the sentence has an error and select the appropriate option. If a sentence is free from error, select 'No Error'.**

**Before you finalise (1)/ any of them, search (2)/ and comparing. (3)/ No Error (4)**

- 1) 1
- 2) 2
- 3) 3
- 4) 4

**Correct Answer: 3**

**QID : 53 - In the following question, the sentence given with blank to be filled in with an appropriate word. Select the correct lternative out of the four and indicate it by selecting the appropriate option.**

**Aashish tried to \_\_\_\_\_ smoking, but did not succeed.**

- 1) get away
- 2) put out
- 3) give up
- 4) do away

**Correct Answer: give up**

**QID : 54 - In the following question, the sentence given with blank to be filled in with an appropriate word. Select the correct alternative out of the four and indicate it by selecting the appropriate option.**

**Ashina has invited some of her friends \_\_\_\_\_ coffee.**

- 1) on
- 2) for
- 3) to
- 4) at

**Correct Answer: for**

**QID : 55 - In the following question, out of the give four alternatives, select the one which best expresses the meaning of the given word.**

**Amplify**

- 1) Boost
- 2) Contract
- 3) Curtail
- 4) Shorten

**Correct Answer: Boost**

**QID : 56 - In the following question, out of the give four alternatives, select the one which best expresses the meaning of the given word.**

**Casual**

- 1) Planned
- 2) Occasional
- 3) Deliberate
- 4) Serious

**Correct Answer: Occasional**

**QID : 57 - In the following question, out of the give four alternatives, select the one which best expresses the meaning of the given word.**

**Insane**

- 1) Reasonable
- 2) Healthy
- 3) Crazy
- 4) Balanced

**Correct Answer: Crazy**

**QID : 58 - In the following question, out of the give four alternatives, select the one which is opposite in meaning of the given word.**

**Hinder**

- 1) Arrest
- 2) Aid

- 3) Check
- 4) Curb

**Correct Answer: Aid**

**QID : 59 - In the following question, out of the give four alternatives, select the one which is opposite in meaning of the given word.**

**Provident**

- 1) Wasteful
- 2) Saving
- 3) Cautious
- 4) Prepared

**Correct Answer: Wasteful**

**QID : 60 - In the following question, out of the give four alternatives, select the one which is opposite in meaning of the given word.**

**Subtle**

- 1) Fine
- 2) Implied
- 3) Indirect
- 4) Harsh

**Correct Answer: Harsh**

**QID : 61 - In the following question, out of the four given alternatives, select the alternative which best expresses the meaning of the Idiom/Phrase.**

**Ill at ease**

- 1) To be uncomfortable
- 2) To be in fashion
- 3) To be in a puzzling state
- 4) To be in danger

**Correct Answer: To be uncomfortable**

**QID : 62 - In the following question, out of the four given alternatives, select the alternative which best expresses the meaning of the Idiom/Phrase.**

**Get the upper hand**

- 1) To revenge
- 2) To start to go
- 3) To take risk
- 4) To get an advantage

**Correct Answer: To get an advantage**

**QID : 63 - Improve the bracketed part of the sentence.**

**Today is the (original day) to complete this, after it you won't be able to do so.**

- 1) last day
- 2) first day
- 3) second day
- 4) No improvement

**Correct Answer: last day**

**QID : 64 - Improve the bracketed part of the sentence.**

**(Attention) is better than cure.**

- 1) Examination
- 2) Prevention
- 3) Creation
- 4) No improvement

**Correct Answer: Prevention**

**QID : 65 - In the following question, out of the four given alternatives, select the alternative which is the best substitute of the phrase.**

**Science of writing and compiling a dictionary**

- 1) Calligraphy
- 2) Lexicography
- 3) Autobiography
- 4) Bibliography

**Correct Answer: Lexicography**

**QID : 66 - In the following question, out of the four given alternatives, select the alternative which is the best substitute of the phrase.**

**Science of the constitution of the whole universe**

- 1) Cosmopolitan
- 2) Chronicle
- 3) Cosmography
- 4) Connoisseur

**Correct Answer: Cosmography**

**QID : 67 - In the following question, a word has been written in four different ways out of which only one is correctly spelt. Select the correctly spelt word.**

- 1) Challing
- 2) Challenge

- 3) Challeng
- 4) Chaillege

**Correct Answer: Challenge**

**QID : 68 - In the following question, a word has been written in four different ways out of which only one is correctly spelt. Select the correctly spelt word.**

- 1) Diagnose
- 2) Daignose
- 3) Diagnause
- 4) Diagnuase

**Correct Answer: Diagnose**

**QID : 69 - Rearrange the parts of the sentence in correct order.**

**Good books**

**P: man in various**

**Q: have always helped**

**R: spheres of life**

- 1) QPR
- 2) RPQ
- 3) RQP
- 4) QRP

**Correct Answer: QPR**

**QID : 70 - Rearrange the parts of the sentence in correct order.**

**There is a**

**P: in doing one's work**

**Q: honestly and efficiently**

**R: sense of joy**

- 1) PQR
- 2) QRP
- 3) RPQ
- 4) QPR

**Correct Answer: RPQ**

**QID : 71 - In the following passage some of the words have been left out. Read the passage carefully and select the correct answer for the given blank out of the four alternatives.**

\_\_\_\_\_ is everything which we do in the right way in right time. It leads \_\_\_\_\_ on the right path. We all follow various types of discipline in our \_\_\_\_\_ lives. There are many



\_\_\_\_\_ like we wake up in the early morning, drink a glass of water, go to the washroom to get fresh, do brush our teeth, take bath, have \_\_\_\_\_, go to school in uniform at right time, etc all are discipline.

\_\_\_\_\_ **is everything**

- 1) Religion
- 2) Relation
- 3) Discipline
- 4) Origin

**Correct Answer: Discipline**

**QID : 72 - In the following passage some of the words have been left out. Read the passage carefully and select the correct answer for the given blank out of the four alternatives.**

\_\_\_\_\_ is everything which we do in the right way in right time. It leads \_\_\_\_\_ on the right path. We all follow various types of discipline in our \_\_\_\_\_ lives. There are many \_\_\_\_\_ like we wake up in the early morning, drink a glass of water, go to the washroom to get fresh, do brush our teeth, take bath, have \_\_\_\_\_, go to school in uniform at right time, etc all are discipline.

**It leads \_\_\_\_\_ on the right path.**

- 1) us
- 2) you
- 3) them
- 4) all

**Correct Answer: us**

**QID : 73 - In the following passage some of the words have been left out. Read the passage carefully and select the correct answer for the given blank out of the four alternatives.**

\_\_\_\_\_ is everything which we do in the right way in right time. It leads \_\_\_\_\_ on the right path. We all follow various types of discipline in our \_\_\_\_\_ lives. There are many \_\_\_\_\_ like we wake up in the early morning, drink a glass of water, go to the washroom to get fresh, do brush our teeth, take bath, have \_\_\_\_\_, go to school in uniform at right time, etc all are discipline.

**types of discipline in our \_\_\_\_\_ lives.**

- 1) boring
- 2) daily

3) caring

4) daring

**Correct Answer: daily**

**QID : 74 - In the following passage some of the words have been left out. Read the passage carefully and select the correct answer for the given blank out of the four alternatives.**

\_\_\_\_\_ is everything which we do in the right way in right time. It leads \_\_\_\_\_ on the right path. We all follow various types of discipline in our \_\_\_\_\_ lives. There are many \_\_\_\_\_ like we wake up in the early morning, drink a glass of water, go to the washroom to get fresh, do brush our teeth, take bath, have \_\_\_\_\_, go to school in uniform at right time, etc all are discipline.

**There are many \_\_\_\_\_ like we wake**

1) exceptions

2) citations

3) creations

4) examples

**Correct Answer: examples**

**QID : 75 - In the following passage some of the words have been left out. Read the passage carefully and select the correct answer for the given blank out of the four alternatives.**

\_\_\_\_\_ is everything which we do in the right way in right time. It leads \_\_\_\_\_ on the right path. We all follow various types of discipline in our \_\_\_\_\_ lives. There are many \_\_\_\_\_ like we wake up in the early morning, drink a glass of water, go to the washroom to get fresh, do brush our teeth, take bath, have \_\_\_\_\_, go to school in uniform at right time, etc all are discipline.

**take \_\_\_\_\_, go to school in uniform at right time, etc**

1) lunch

2) breakfast

3) dinner

4) snacks

**Correct Answer: breakfast**

## SSC MTS 2017 RE-EXAM PAPER : Held on 21- SEPTEMBER-2017 Shift-1

### ::General Awareness::

---

**QID : 76 - A drill machine in the hands of a plumber is what type of a good?**

- 1) Consumer
- 2) Costly
- 3) Cheap
- 4) Intermediary

**Correct Answer: Consumer**

**QID : 77 - According to Indian constitution, government has how many organs?**

- 1) One
- 2) Two
- 3) Three
- 4) Four

**Correct Answer: Three**

**QID : 78 - How many fundamental rights are there in Indian Constitution?**

- 1) 10
- 2) 8
- 3) 6
- 4) 4

**Correct Answer: 6**

**QID : 79 - Under whose presidentship fight for Purna Swaraj resolution was passed?**

- 1) Mahatma Gandhi
- 2) Md. Ali Jinnah
- 3) Subhash Chandra Bose
- 4) Jawahar Lal Nehru

**Correct Answer: Jawahar Lal Nehru**

**QID : 80 - Whose descendants were the Mughals from their father's side?**

- 1) Timur
- 2) Genghis Khan
- 3) Sher Shah Suri
- 4) None of these

**Correct Answer: Timur**

**QID : 81 - Our solar system consists of how many planets?**

- 1) 8
- 2) 10
- 3) 9
- 4) 7

**Correct Answer: 8**

**QID : 82 - Which is the highest mountain peak on Earth?**

- 1) Mauna Kea
- 2) Mount Everest
- 3) Kangchenjunga
- 4) Makalu

**Correct Answer: Mount Everest**

**QID : 83 - If the stomach did not produce any hydrochloric acid, which enzyme will not function?**

- 1) Ptyalin
- 2) Rennin
- 3) Pepsin
- 4) Lipase

**Correct Answer: Pepsin**

**QID : 84 - Smaller roots coming out of main root is called as \_\_\_\_\_.**

- 1) Tap root
- 2) Lateral root
- 3) Fibrous root
- 4) Ring root

**Correct Answer: Lateral root**

**QID : 85 - Both erythrocytes and leucocytes are formed in the \_\_\_\_\_.**

- 1) Bone marrow
- 2) Thymus
- 3) Arterial walls
- 4) Lymph nodes

**Correct Answer: Bone marrow**

**QID : 86 - Electricians use rubber gloves while working because**

- 1) rubber is an insulator
- 2) rubber is a good conductor
- 3) wearing rubber gloves is mandatory
- 4) rubber makes work easy

**Correct Answer: rubber is an insulator**

**QID : 87 - If a pendulum is allowed to oscillate in vacuum, its time period will \_\_\_\_\_.**

- 1) decreases
- 2) Increases
- 3) remains same
- 4) first increases and then decreases

**Correct Answer: decreases**

**QID : 88 - Which format of email address is correct?**

- 1) xyz@website@co.in
- 2) xyz.website@co.in
- 3) xyz@website.co.in
- 4) xyz.website.co.in

**Correct Answer: xyz@website.co.in**

**QID : 89 - The atomic number of an element is determined by \_\_\_\_\_.**

- 1) adding the number of electrons & protons in one atom
- 2) the number of neutrons in one atom
- 3) the valency of the element
- 4) the number of protons in one atom

**Correct Answer: the number of protons in one atom**

**QID : 90 - The number of electrons in the outer shell of the most stable or inert atoms is \_\_\_\_\_.**

- 1) 1
- 2) 5
- 3) 3
- 4) 8

**Correct Answer: 8**

**QID : 91 - What are the dissolved and suspended impurities in sewage called?**

- 1) Impurities
- 2) Waste
- 3) Solids
- 4) Contaminants

**Correct Answer: Contaminants**

**QID : 92 - Which among the following is not a category of loan under Pradhan Mantri Mudra Yojana?**

- 1) Shishu
- 2) Vayask
- 3) Tarun
- 4) Kishore

**Correct Answer: Vayask**

**QID : 93 - Who among the following discovered laws of planetary motion?**

- 1) J. Kepler
- 2) Albert Einstein
- 3) N. Copernicus
- 4) Otto Blathy

**Correct Answer: J. Kepler**

**QID : 94 - Which country won the 2017 ICC Champions Trophy?**

- 1) India
- 2) England
- 3) Pakistan
- 4) Australia

**Correct Answer: Pakistan**

**QID : 95 - Phulkari, Kantha and Chikankari are famous forms of \_\_\_\_\_.**

- 1) Dance
- 2) Painting
- 3) Music
- 4) Embroidery

**Correct Answer: Embroidery**

**QID : 96 - Who is the winner of UNESCO Peace Prize 2017?**

- 1) Bollywood Actor Aamir Khan
- 2) Italy's Mayor Glusi Nicolini
- 3) Writer David Grossman
- 4) UK Minister Priti Patel

**Correct Answer: Italy's Mayor Glusi Nicolini**

**QID : 97 - Who is the author of the book named "Gods of Antarctica"?**

- 1) Vishal Sikka
- 2) Tarun Khanna
- 3) Yashwardhan Shukla
- 4) Amitav Ghosh

**Correct Answer: Yashwardhan Shukla**

**QID : 98 - The Mekong Ganga Cooperation is an initiative by India and how many other countries?**

- 1) 3
- 2) 5
- 3) 7
- 4) 11

**Correct Answer: 5**

**QID : 99 - Which among the following Indian state does not share boundary with Pakistan?**

- 1) Punjab
- 2) Rajasthan
- 3) Gujrat
- 4) Maharashtra

**Correct Answer: Maharashtra**

**QID : 100 - What is the full form of GDP?**

- 1) Gross Domestic Product
- 2) Goods Domestic Product
- 3) Goods Dynamic Product
- 4) None of these

**Correct Answer: Gross Domestic Product**